

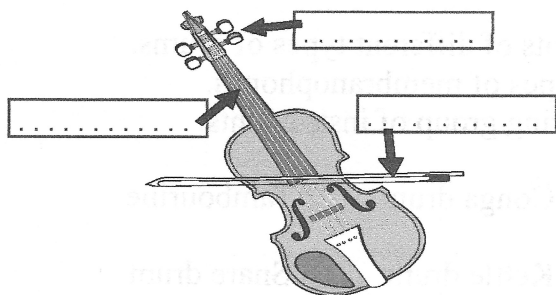


# Musical Instruments

## Worksheet 15

Name .....

### Instrument Details



1) Name this instrument.

\_\_\_\_\_

2) To which orchestral family does it belong?

\_\_\_\_\_

3) How is a musical sound produced on it?

\_\_\_\_\_

\_\_\_\_\_

4) Label some of its parts (as indicated).

1) Name this instrument.

\_\_\_\_\_

2) To which orchestral family does it belong?

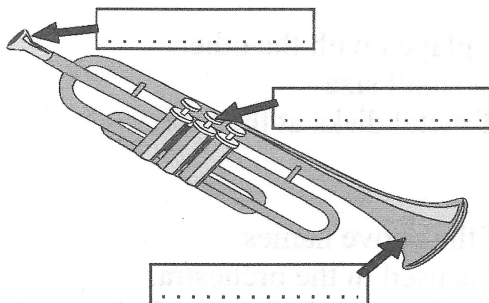
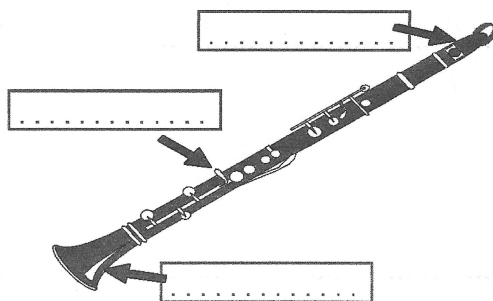
\_\_\_\_\_

3) How is a musical sound produced on it?

\_\_\_\_\_

\_\_\_\_\_

4) Label some of its parts (as indicated).



1) Name this instrument.

\_\_\_\_\_

2) To which orchestral family does it belong?

\_\_\_\_\_

3) How is a musical sound produced on it?

\_\_\_\_\_

\_\_\_\_\_

4) Label some of its parts (as indicated).

1) Name this instrument.

\_\_\_\_\_

2) To which orchestral family does it belong?

\_\_\_\_\_

3) How is a musical sound produced on it?

\_\_\_\_\_

\_\_\_\_\_

4) Label some of its parts (as indicated).

